



Cosmo School

“Practice work at home” 2020 , Banasree Campus















Class: One

Subject: Mathematics

1. Write down the following numbers in words:

Number	Words
i. 35	
ii. 15	
iii. 11	
iv. 50	
v. 27	
vi. 17	
vii. 33	
viii. 46	
ix. 24	
x. 14	

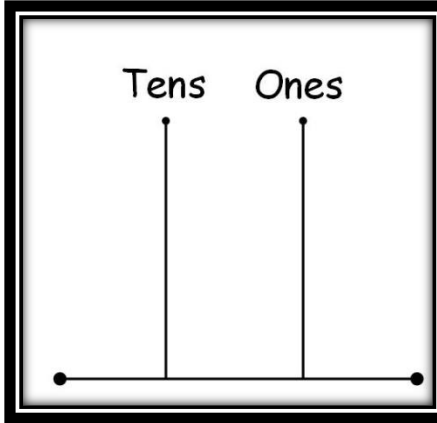
২. নিচের সংখ্যাগুলো কথায় লিখঃ

ক. ১১	=
	
খ. ২৮	=
	
গ. ৩৫	=
	
ঘ. ১৭	=
	
চ. ৮	=
	
ছ. ৩৭	=
	
জ. ২৯	=
	



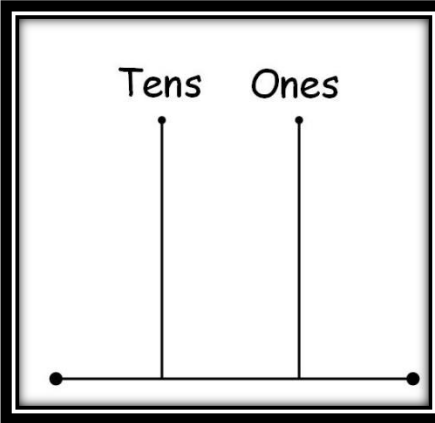
3. Draw the number beads on the tens and ones abacus of the given numbers:

a.



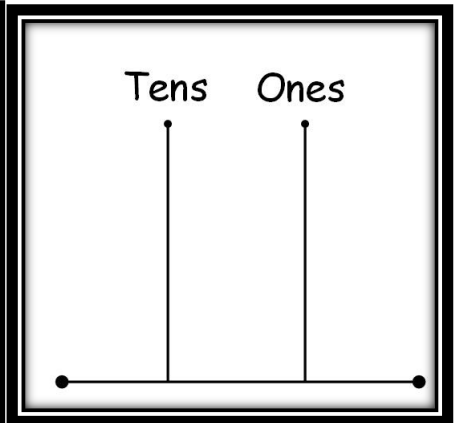
40

b.



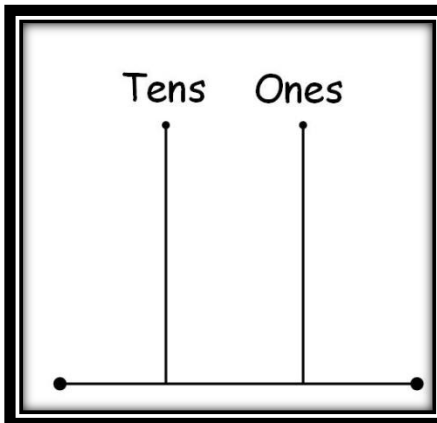
42

c.



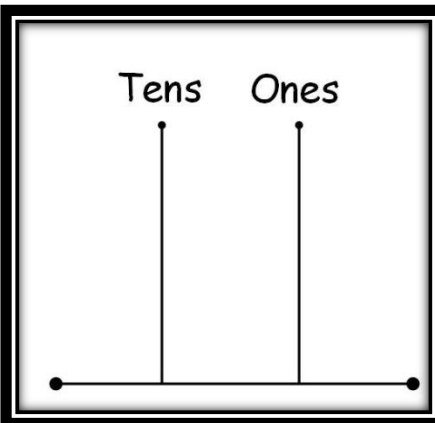
17

d.



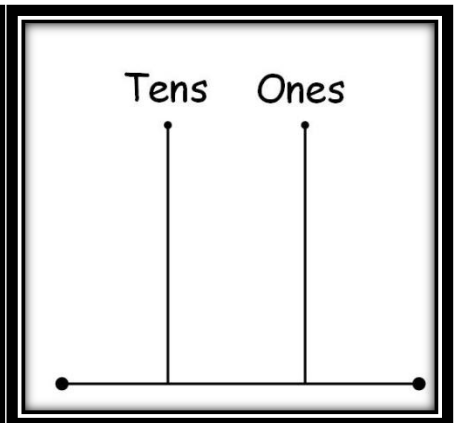
65

e.





74

f.



33



4. Compare the numbers and put the sign $>$, $<$ or $=$ in each box:

a. 26 26

b. 5 55

c. 8 50

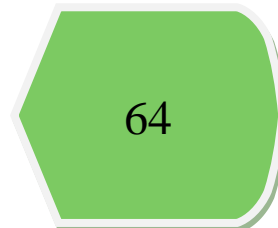
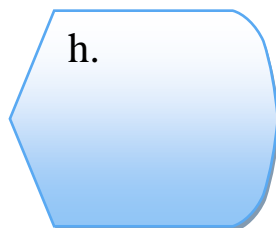

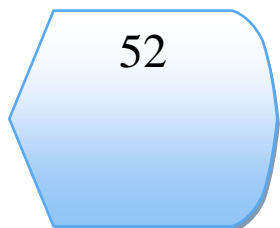
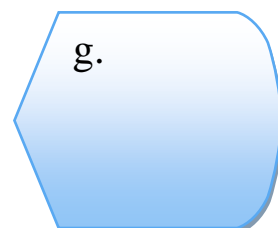
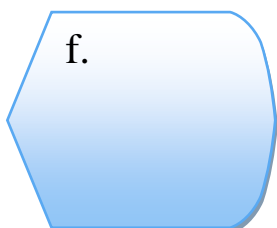
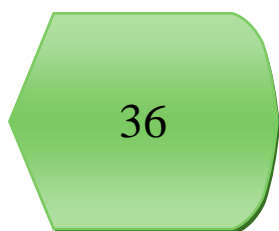
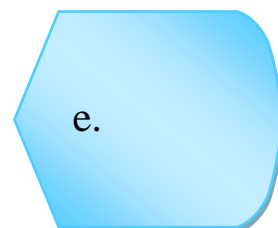
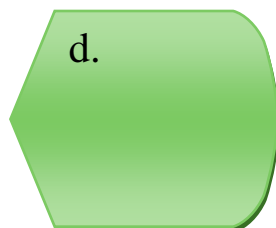
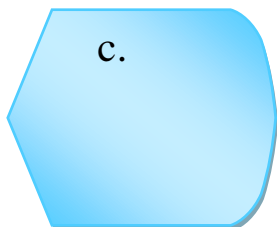

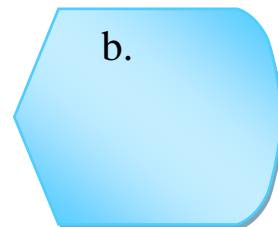
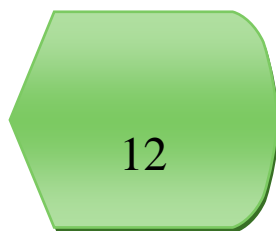

d. 26 7

e. 30 10

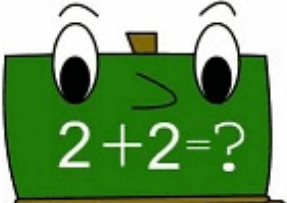
f. 12 24




5. Write down the skip counting by 4 in the blank spaces accordingly:



6.a) Do the following simple additions (1 digit) :

i. $\begin{array}{r} 3 \\ + 9 \\ \hline \square \square \end{array}$	ii. $\begin{array}{r} 4 \\ + 8 \\ \hline \square \square \end{array}$	iii. $\begin{array}{r} 4 \\ + 5 \\ \hline \square \square \end{array}$
iv. $\begin{array}{r} 6 \\ + 6 \\ \hline \square \square \end{array}$	v. $\begin{array}{r} 2 \\ + 8 \\ \hline \square \square \end{array}$	

b) Do the following additions without carrying (2 digits):

i. $\begin{array}{r} 56 \\ + 31 \\ \hline \square \square \end{array}$	ii. $\begin{array}{r} 73 \\ + 4 \\ \hline \square \square \end{array}$	iii. $\begin{array}{r} 36 \\ + 33 \\ \hline \square \square \end{array}$
iv. $\begin{array}{r} 64 \\ + 22 \\ \hline \square \square \end{array}$	v. $\begin{array}{r} 45 \\ + 31 \\ \hline \square \square \end{array}$	

7. Write down the place value of the numbers in the blank spaces:

574

Place value of 5

Place value of 4

Place value of 7

802

Place value of 2

Place value of 0

Place value of 8

8. Write down the times table of 2 in the box accordingly:

<input type="text"/>	<input type="text"/>
<input type="text"/>	<input type="text"/>
<input type="text"/>	<input type="text"/>
<input type="text"/>	<input type="text"/>
<input type="text"/>	<input type="text"/>

9. Complete the times table of 3 in the circle:

