

Revision sheet**Class: Two****Subject: Mathematics****Appendix-2****1. Write only answer:**

1. In the number 268 what is the place value of six?
 - a. Ones.
 - b. Tens.
 - c. Hundreds.
 - d. Thousands.
2. Which one is an even number?
 - a. 69
 - b. 90
 - c. 33
 - d. 75
3. Which one is an odd number?
 - a. 64
 - b. 90
 - c. 33
 - d. 78
4. What is the difference between 34 and 9
 - a. 34
 - b. 9
 - c. 52
 - d. 25.
5. Which one is the sum of 81 and 9.
 - a. 9
 - b. 90
 - c. 81
 - d. 8
6. Emon had 21 marbles and her sister gave him 14. How many marbles does he have in total?
 - a. 35
 - b. 45
 - c. 55
 - d. 65
7. Mr. Shomon printed 68 books, but printing error was found in 27 books and cannot sell. How many books can he sell?
 - a. 41
 - b. 14
 - c. 31
 - d. 13
8. Akmol went to Bazar with TK 68. After shopping, he had Tk 9 left with him. How much money did he spend?
 - a. 95
 - b. 59
 - c. 39
 - d. 35

9. Shipra had 66 story books. She gave 23 to his friend. How many story books dose she has now?

- a. 24
- b. 34
- c. 43
- d. 42

10. The Sum of the age of a father and his son is 84. The is 14 daughter years old .How old is the father?

- a. 98
- b. 89
- c. 70
- d. 80

11. In a school, there are 59 girls and 45 boys in class two. How many students are there in class two in total?

- a. 14
- b. 104
- c. 401
- d. 41

12. Gita has 18 flowers. Poppy gives her 7 more. How many flowers does she have now?

- a. 52
- b. 25
- c. 53
- d. 35

13. Zian bought meat for 545 taka and vegetables for 238 taka. For buying which thing he spent more money?

- a. 283
- b. 7
- c. Meat
- d. vegetables





14. Which one more 1 then 99?

- a. 1
- b. 10
- c. 100
- d. 1000

15. In 2019, the Bangladesh cricket team played total 16 international one day matches. If they lost in the 5 matches, then how many matches had they win?

- a. 1
- b. 11
- c. 10
- d. 17

16. Which one is the real- life example of triangle?

- a. 
- b. 
- c. 
- d. 

17. How many sides does a triangle have?

- a. 2
- b. 3
- c. 4
- d. 5

18. Which one is correct answer?

- a. $56+34=34$
- b. $56-34=34$
- c. $56+34=90$
- d. $56-34=32$

19. How many sides does a quadrangle have?

- a. 2
- b. 3
- c. 4
- d. 5

20. Which one is correct answer?

- a. $67+34=198$
- b. $67-34=23$
- c. $67+34=90$
- d. $67-34=33$