

Cosmo School
Class- 2
Subject- Science
Unit-3: Health and Care
(4)- Our Body
Revision sheet


1. Fill in the blanks with the appropriate word:


- a) Our body is made up of ____ and ____.
- b) Bones are ____ and ____.
- c) The bones inside our body form a ____.
- d) ____ covers the bones.
- e) We use our ____ to think.
- f) We have a pair of ____
- g) Our ____ pumps blood.
- h) Bones and muscles work ____.

2. Write True or False:

- a) Our body is made up of bones only.
- b) We have 206 bones in our body.
- c) We cannot move our body because we have joints.
- d) We have a pair of heart.
- e) Exercising regularly keeps our muscles strong.
- f) The bones inside our body form a framework.



- g)  is pumped by the brain.
- h) Skeleton protects the internal organs of our body.
- i) We should not follow any rule for sitting.



- j) We use our  to think.

3. Choose and write the correct answer:

- i. How many bones do we have?
a. 204 b. 205 c. 206 d. 207
- ii. What does help to move parts of our body?
a. Muscles b. joint c. bones d. stomach
- iii. Which of the following is soft part of our body?
a. Muscles b. brain c. bone d. Skeleton
- iv. How many muscles do we have in our body?
a. 600 b. 700 c. 800 d. 900
- v. Which of the following does help us to stand straight?
a. Skeleton b. brain c. muscle d. heart
- vi. What does make our muscles strong?
a. Exercising b. sleeping c. eating d. none of them

Cosmo School
Class- 2
Subject- Science
Unit-3: Health and Care
(4)- Our Body
Revision sheet

- vii. Which of the following organ does help us to think?
a. Stomach b. brain c. liver d. heart.
- viii. Which of the following organ does help us to breathe?
a. Stomach b. brain c. lungs d. heart
- ix. Which of the following organ does pump blood to all of body?
a. Stomach b. brain c. lungs d. heart
- x. The position in which we keep our body when we sit, stand or walk is called _____.
a. Exercise b. swing c. posture d. none of them.

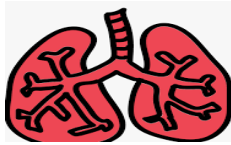
4. Write the answer of following question in one word:



- 1) How many _____ do we have?
- 2) What is the framework of our body called?
- 3) What does help to move parts of our body?
- 4) What covers the bones and help them to move?



- 5) Which organ does help to digest _____?
- 6) Which organ does help to think?
- 7) Which organ does help to breathe?



- 8) How many _____ do we have?
- 9) What is called when two or more bones meet together?
- 10) How many muscles do we have in our body?


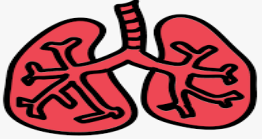



5. Answer the following question in short:

- a) What is skeleton?
- b) How are bones and muscles useful to us?
- c) What is posture?
- d) What is a joint?
- e) What works does the skeleton do?

Cosmo School
 Class- 2
 Subject- Science
 Unit-3: Health and Care
 (4)- Our Body
 Revision sheet

6. Answer the following question broadly:
 a) How can we keep our body healthy?
 b) State the correct posture for sitting.

7. Match column A with column B:

Column A	Column B
Muscles cover the	
We can digest our food with	
The place where bones meet	
We have a pair of	
We can think with	


Prepared by:
 Sadia Binta Basher
 Assistant teacher.
 Science (main campus)

Class-2
Unit 1- plant life
(2)- uses of plants.
Revision sheet

1. Write true or false:

- i. Corn is the leaf of a plant. ()
- ii. We get spices from plants. ()
- iii. Tea is made from cocoa seeds. ()

- iv.  and  are actually fruits. ()
- v. Neem is used in some toothpaste. ()

- vi.  is the root of a plant. ()
- vii. Basil is used to treat cough and cold. ()
- viii. Beetroot is the stem of the beet plant, ()
- ix. Chickpeas are pulses. ()
- x. Cardamom is a spice. ()

2. Fill in the blanks with appropriate words.

- a. _____ add flavour to our food.
- b. Spices make our food _____.



- c. _____ are _____ drinks.
- d. _____ is used to make cough syrup.
- e. We get rubber from the _____ tree.
- f. Paper is made from the _____ plant.
- g. We get gum from the _____ tree.
- h. Gum is used to make _____.
- i. We eat different _____ of plants.
- j. Neem helps in killing _____.

3. Multiple choice questions:

- i. We get rubber from which of the following tree?
a. Rubber b. bamboo c. mint d. coconut.
- ii. Which of the following does gives us oil?









- iii. Which of the following is not a spice?
a. Corn b. turmeric c. black pepper d. clove.
- iv. Which of the following vegetable is a root of plant?
a. Brinjal b. olive c. radish d. coconut.

Class-2
Unit 1- plant life
(2)- uses of plants.
Revision sheet

- v. Which one is a stem vegetable?
a. Broccoli b. cabbage c. celery d. cauliflower.
- vi. Which of the following is a pulse?
a. Wheat b. red lentil c. rice d. corn.
- vii. We can make medicine from which of the following plant?
a. Mint b. coriander c. cabbage d. cauliflower.
- viii. We get wood from which of the following plant?
a. Teak b. oak c. bamboo d. all of them.
- ix. Which of the following vegetable is not a root of a plant?
a. Carrot b. radish c. beetroot d. brinjal.

4. Match the following:

Plant	Part We Eat
	Flower
	Fruit
	Seeds
	Leaves
	Stem
	Root

Class-2
Unit 1- plant life
(2)- uses of plants.
Revision sheet

5. Answer the following in one word:
- 1) What is used to make tyres?
 - 2) What is used to make glue?
 - 3) Name a refreshing drink.
 - 4) Which part of cabbage do we eat?
 - 5) Write a name of a fruit.
6. Answer the following short questions:
- a) What is spice?
 - b) How do we get sunflower oil?
 - c) What is cereals?
 - d) Name a plant that is used to treat cough and cold.
 - e) Name a plant that is used to treat stomach ache.
7. Answer the following board question:
- a) How are trees useful to animals?
8. Name one thing that we get from the following plants:
- a. Bamboo: _____
 - b. Acacia tree: _____
 - c. Mango tree: _____
 - d. Sugarcane plant: _____
 - e. Cacao seed: _____
 - f. Cotton: _____
 - g. Oak: _____
 - h. Jute: _____
9. Draw and color four vegetables that are a root, a stem, a flower and a leaf.

Prepared by:
Sadia Binta Basher
Assistant teacher
Science (main campus)