


Chapter: Geometry**1. Draw and Define figures:**

- a. **Point:** A small dot of a sharpen pencil is called point.




Here, A is a point.

- b. **Line:** A set of points in a straight or curve path is called line.




Here, AB and CD are two lines.

- c. **Line segment:** A part of a line is called line segment.



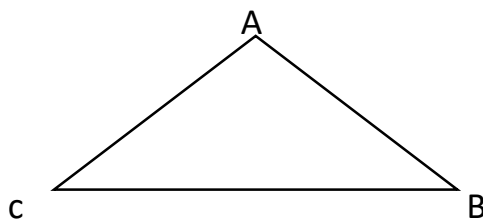
Here, AB is a line segment.

- d. **Ray:** A set of points along a straight line is called Ray.



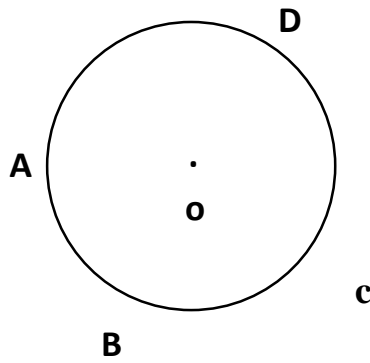
Here, AB is a ray.

- e. **Triangle:** A shape that enclosed by three sides is called triangle.



Here, ABC is a triangle.

f. Circle: A perfect round shape is called circle.



Here, ABCD is a circle and O is the center of the circle.

2. Matching :

1. $a+2$
2. $b+4$
3. $c+3$
4. $d+1$