




## 1. Pre-number concept

a. Tick the small objects or write down the answers in the answer script



1

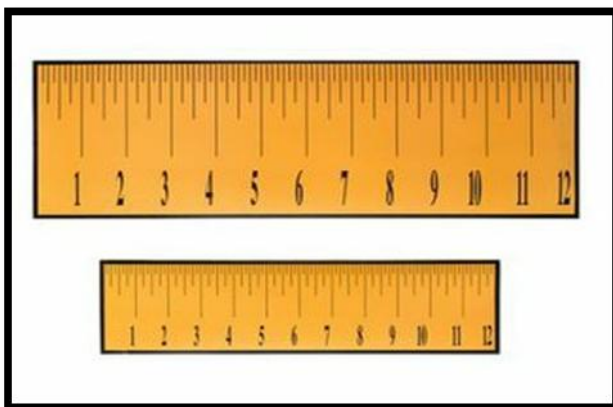
2



1


2

a. b. Tick the Longer objects or write down the answers in the answer script



1

2



1

2

c. Tick the medium object or write the answer in the answer script

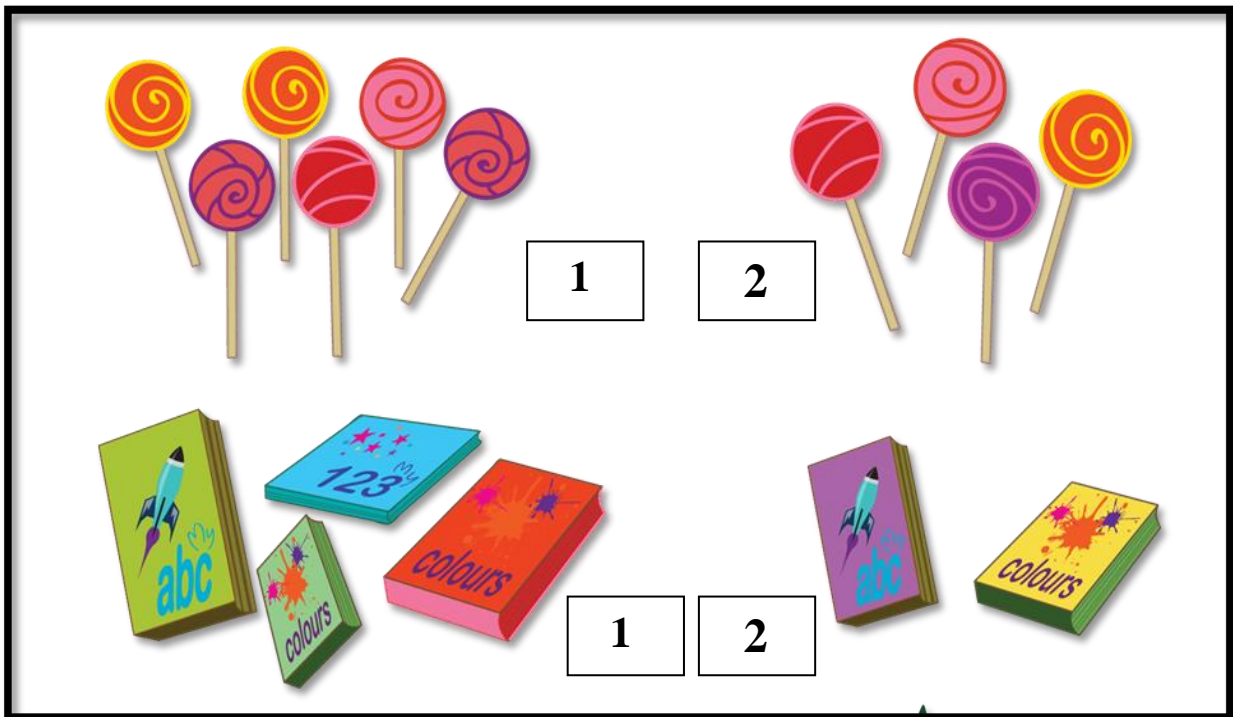


1

2

3

d. Tick on the set which has the most objects or write the answer in the answer script



1

2

1

2

**2. Write down the numbers (21-60) accordingly in given space or in the answer script:**


**3. Write down the after numbers which have given below or in the answer script :**

**a. 4 .....**

**b. 12 .....**

**c. 23 .....**

**d. 26 .....**

**e. 38 .....**

**f . 20**

**g. 34 .....**

**h. 30 .....**





**i. 19 .....**

**j. 17.....**

**k. 29 .....**

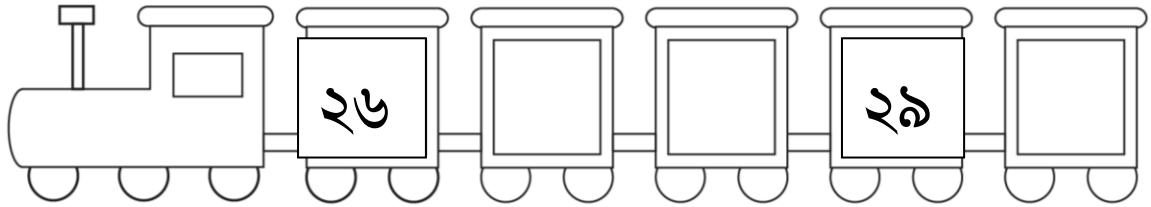
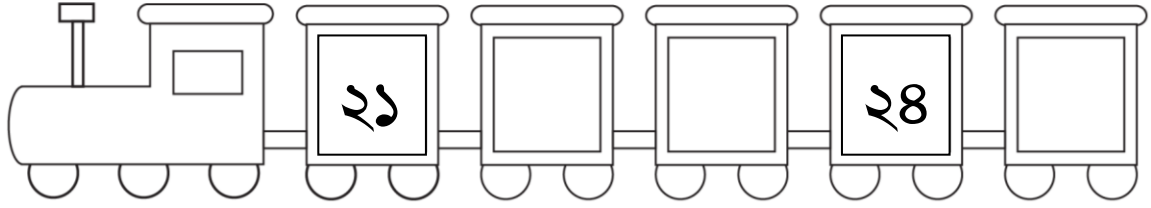
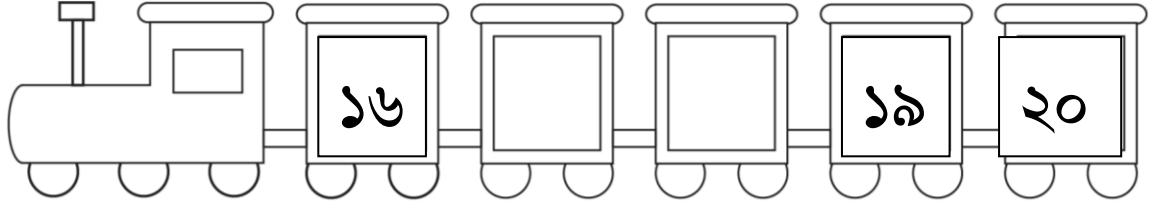
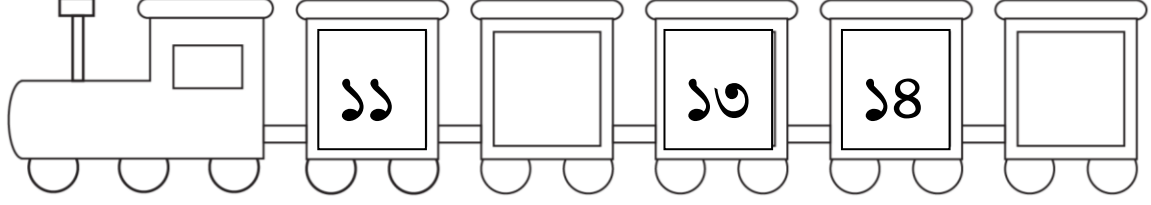
**l. 10 .....**

4. Write down the missing numbers from (1-20) accordingly or in the answer script:











	1			4	
	5		7		9
10			13		15
	16			19	

৫. (২১ - ৬০) সংখ্যাগুলো ক্রমানুসারে নিচের খালি ঘরে লিখ অথবা খাতায় লিখঃ


৬. শূন্যস্থানে সঠিক সংখ্যা বসিয়ে ১১-৩০ সংখ্যাগুলো ক্রমানুসারে লিখ  
অথবা খাতায় লিখঃ



**7. Count the pictures and write down the numbers in given spaces or write down the answers in the answer script:**

<b>a</b>		 <input data-bbox="1267 501 1474 636" type="text"/>
<b>b</b>		 <input data-bbox="1267 766 1474 900" type="text"/>
<b>c</b>		 <input data-bbox="1267 1016 1474 1151" type="text"/>
<b>d</b>		 <input data-bbox="1267 1281 1474 1415" type="text"/>
<b>e</b>		 <input data-bbox="1267 1554 1474 1688" type="text"/>



**8. Put < or > or = between numbers in the circle to compare the given numbers or write down the answers in the answer script:**

a. 9 ○ 12

b. 20 ○ 18

c. 7 ○ 15

d. 14 ○ 14

e. 8 ○ 5


f. 16 ○ 8

**9. Write the given numbers in ascending order in the given spaces or in the answer script:**

10	5	8	4	2

5	9	1	8	2

10. Do the given additions by counting the pictures:



+

$$\square + \square = \square$$



+

$$\square + \square = \square$$



+




$$\square + \square = \square$$




+


$$\square + \square = \square$$



+



$$\square + \square = \square$$



+

$$\square + \square = \square$$