




Subject: G. Science

1. Fill in the blanks with the following appropriate words:

living	poured	many	seed	wood
tear	skin	Can not	eyes	feel

- Plants _____ move on their own.
- A small plant is born from _____.
- All plants and animals are _____ things.
- _____ can be cut easily with a saw.
- Liquids can be _____.
- Paper can _____ easily.
- Our body has _____ parts.
- Sense organs help to _____ the world.
- Eyes, ears, nose, tongue and _____ are called sense organs.
- While reading book, we use our _____.



2. Read the following sentences and put a tick (✓) mark on the correct option:

- a. A river is made by man. (True / False)
- b. Snow is living things. (True / False)
- c. A stone can breathe. (True / False)
- d. Water and moon are natural non-living things. (True / False)
- e. A plant can walk. (True / False)
- f. We can clearly see in the dark. (True / False)
- g. We feel different objects by touching. (True / False)
- h. We have 8 senses. (True / False)



VISION



HEARING



SMELL



TASTE



TOUCH



3. Chose the correct answer and put a tick (✓) mark beside it:

1) Which one is living thing?



2) Which one can feel?



3) Which one can have baby?



4) Which one is natural non-living thing?



5) Which one is man-made thing?



6) Which one can move?



4. Write down the missing letters to make a meaningful word with the help of the given pictures:

1) m _ _ _ u _ _ _ t _ _ _ i _ _ _



2) _ _ _ i _ _ _ e _ _ _



3) s _ _ _ _ n _ _ _



4) _ _ _ o _ _ _ e



5. How many numbers have for the following parts in our body which are given below:

a. toe = _____

b. eye = _____

















c. finger = _____

d. head = _____

6. Match with the correct option by drawing a line:

a) Doll	●	●	stone
b) Plant	●	●	table
c) Natural non-living thing	●	●	play
d) Made by man	●	●	mango

7. Which parts of your body do you use when you do the following things? Circle the correct parts:

1. Write:				
2. Clap:				
3. Bite:				
4. Kick:				

8. Chose the correct answer and put a tick (✓) mark beside it:

1) Book is made by ___.

- i. paper ii. plastic iii. glass

2) Car is made by ___.

- i. paper ii. metal iii. liquid

3) Liquids can be ___.

- i. poured ii. cut iii. bent

4) Oil is ___ material.

- i. liquid ii. solid iii. gas

5) There are ___ types of materials.

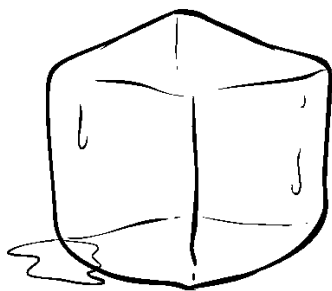
- i. 5 ii. 3 iii. 6

6) Wood is very ___.


- i. hard ii. soft iii. liquid




STATES OF MATTER



Solid



Liquid



Gas

9. Mark each material with the correct letter using the given key:









Solid= S

Liquid= L

Gas= G



10. Match with the correct option:

1. 	●	●	a) 
2. 	●	●	b) 
3. 	●	●	c) 
4. 	●	●	d) 

11. Write down the use of the sense organs in one word with the help of the picture:



a. eye _____

b. nose _____

c. skin _____

d. tongue _____

12. Label the name of the following body parts in the picture from the options which are given in the box:

neck	ear	finger	hand	knee	eye
------	-----	--------	------	------	-----

