











## Chapter: Fraction

1. Match the columns with the appropriate answers.

**Table A**

Column A		Column B	
a.	The one part of the two parts.	1.	
b.	The one parts of the four parts.	2.	
c.	The two parts of four parts.	3.	
d.	The three parts of the four parts.	4.	
e.	Full.	5.	

**Table B**

Column A		Column B	
a.		1	$\frac{1}{4}$
b.		2	$\frac{1}{2}$
c.		3	$\frac{2}{4}$
d.		4	$\frac{3}{4}$
e.		5	1

2. Write in numbers:

- a. The one part of the two parts.
- b. The one parts of the four parts.
- c. The two parts of the four parts.
- d. The three parts of the four parts.

3. Compare the following fractions with sign “<” or “>”

a.  $\frac{1}{2}$    $\frac{1}{4}$

b.  $\frac{1}{2}$    $\frac{2}{4}$

c.  $\frac{1}{2}$    $\frac{3}{4}$

d.  $\frac{1}{4}$    $\frac{2}{4}$

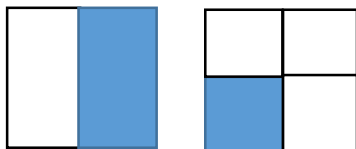
e.  $\frac{1}{4}$    $\frac{3}{4}$

f.  $\frac{2}{4}$    $\frac{3}{4}$

3. Write in words:

- a.  $\frac{1}{2}$
- b.  $\frac{1}{4}$
- c.  $\frac{2}{4}$
- d.  $\frac{3}{4}$

1. Reza compared the shaded part of the figures showing .on the bellow and said “ $\frac{1}{2}$  is smaller than  $\frac{1}{4}$ ”.Do you think his answer is correct ?Please explain Why you think so.



Compiled by---  
**Shameema Akhtar**  
Asst. Mathematics Teacher  
**Boys section-2**  
**Cosmo School.**  
**Mirpur Dhaka-1216**