

Name: \_\_\_\_\_ Subject: \_\_\_\_\_

Class: **One** Roll No: \_\_\_\_\_ Section: \_\_\_\_\_ Sign: \_\_\_\_\_

**1. Find out True / False and write the correct answer in the bracket:**

**$6 \times 1 = 6$**

a) $2 \times 2 = 4$	(                      )
b) $3 \times 6 = 19$	(                      )
c) $4 \times 4 = 16$	(                      )
d) $5 \times 3 = 15$	(                      )
e) $2 \times 5 = 11$	(                      )
f) $6 \times 7 = 35$	(                      )



2. Do the following multiplications and match it with the correct answer :

$$5 \times 2 = 10$$

a.  $2 \times 3$

b.  $4 \times 0$

c.  $3 \times 6$

d.  $5 \times 7$

e.  $6 \times 4$

a. 18

b. 24

c. 35



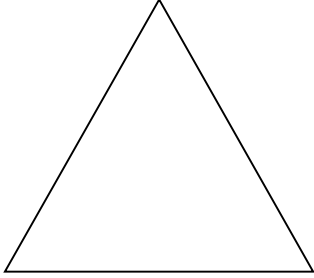
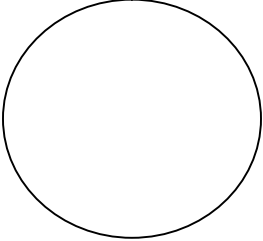
d. 6

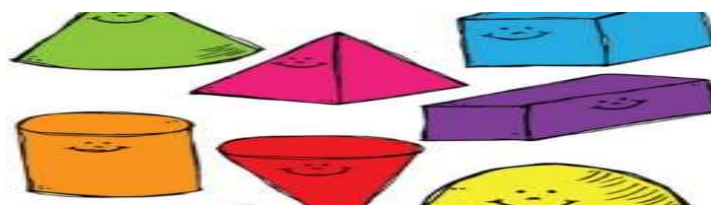
e. 0



3. Put a Tick (✓) mark beside the correct answers:

4 x 1 = 4

	<ul style="list-style-type: none"><li>● Triangle</li><li>● Circle</li><li>● Square</li></ul>
	<ul style="list-style-type: none"><li>● Rectangle</li><li>● Diamond</li><li>● Pentagon</li></ul>
	<ul style="list-style-type: none"><li>● Square</li><li>● Triangle</li><li>● Cylinder</li></ul>
	<ul style="list-style-type: none"><li>● Star</li><li>● Oval</li><li>● Circle</li></ul>



 Teacher's mail address: [zuva.ibnat@yahoo.com](mailto:zuva.ibnat@yahoo.com)