



Revision Work

Name: \_\_\_\_\_ Subject: **Math**  
Class: \_\_\_\_\_ Roll No: \_\_\_\_\_ Section: \_\_\_\_\_ Sign: \_\_\_\_\_

**1. Do the multiplications by counting the pictures and write the results in the blank boxes.**




x

=



x

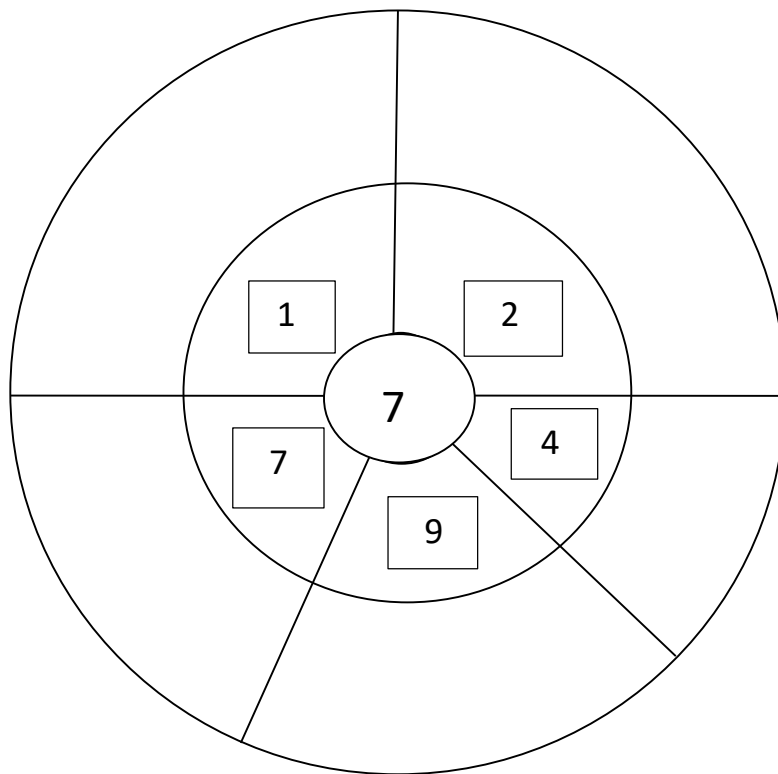
=



x

=

**2. Multiply and fill in the blanks :**



**3. Find out True / False and write the correct answer in the bracket:**

a) $2 \times 2 = 4$	(                      )
b) $3 \times 6 = 19$	(                      )
c) $4 \times 4 = 16$	(                      )
d) $5 \times 3 = 15$	(                      )

4. Multiply using the tables and write the results :

$4 \times 2 =$

$3 \times 7 =$

$5 \times 3 =$

$6 \times 0 =$



5. Write down times table of 5 :

<table border="1"><tr><td></td><td></td><td></td><td></td><td></td><td></td><td></td><td></td></tr></table>									<table border="1"><tr><td></td><td></td><td></td><td></td><td></td><td></td><td></td><td></td></tr></table>								
<table border="1"><tr><td></td><td></td><td></td><td></td><td></td><td></td><td></td><td></td></tr></table>									<table border="1"><tr><td></td><td></td><td></td><td></td><td></td><td></td><td></td><td></td></tr></table>								
<table border="1"><tr><td></td><td></td><td></td><td></td><td></td><td></td><td></td><td></td></tr></table>									<table border="1"><tr><td></td><td></td><td></td><td></td><td></td><td></td><td></td><td></td></tr></table>								
<table border="1"><tr><td></td><td></td><td></td><td></td><td></td><td></td><td></td><td></td></tr></table>									<table border="1"><tr><td></td><td></td><td></td><td></td><td></td><td></td><td></td><td></td></tr></table>								
<table border="1"><tr><td></td><td></td><td></td><td></td><td></td><td></td><td></td><td></td></tr></table>									<table border="1"><tr><td></td><td></td><td></td><td></td><td></td><td></td><td></td><td></td></tr></table>								
<table border="1"><tr><td></td><td></td><td></td><td></td><td></td><td></td><td></td><td></td></tr></table>									<table border="1"><tr><td></td><td></td><td></td><td></td><td></td><td></td><td></td><td></td></tr></table>								

**TIMES TABLES**

