



Revision Work

Name: _____ Subject: _____
Class: _____ Roll No: _____ Section: _____ Sign: _____

Answersheet-2

1. Do the following multiplications and put a tick (✓) mark in the correct box :

a) $3 \times 2 = 6$

True

False

b) $4 \times 3 = 13$

True

False

c) $2 \times 5 = 11$

True

False

d) $7 \times 3 = 21$

True

False

e) $5 \times 5 = 26$

True

False

f) $6 \times 3 = 18$

True

False



2. Do the multiplications and write the results in the blank boxes.



2

x

4

=

8





2

x

5

=

10



3

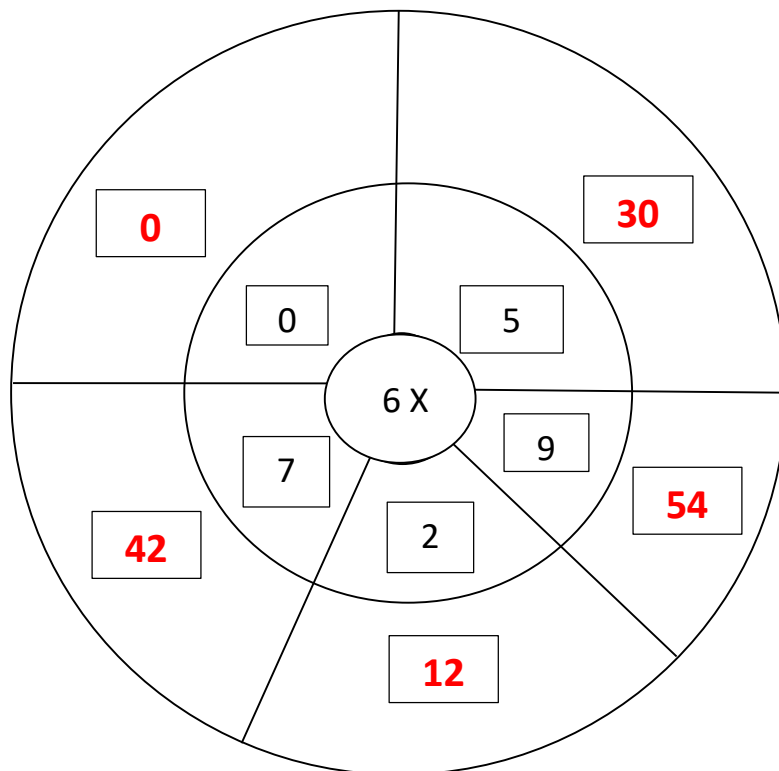
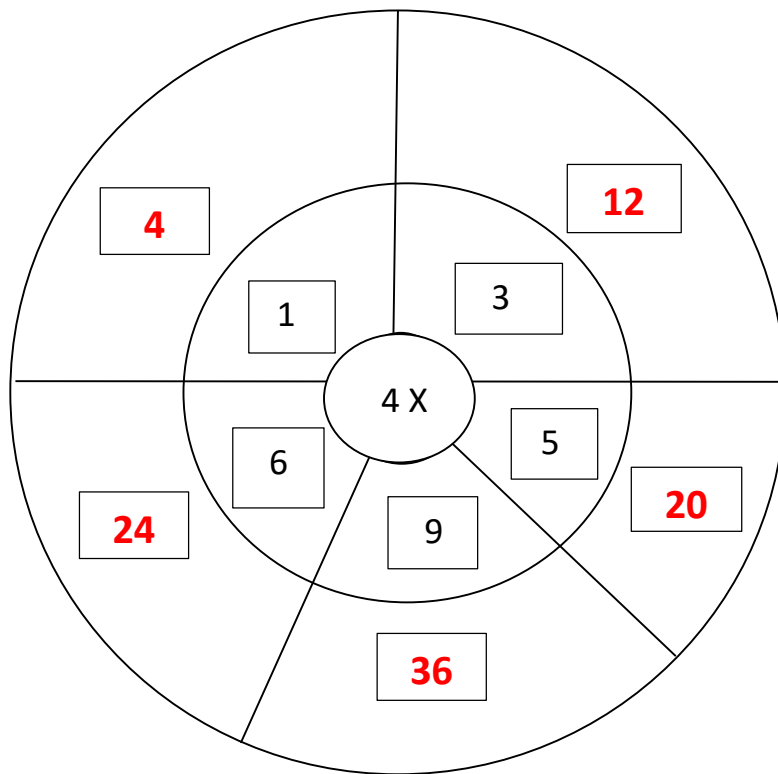
x

6

=

18

3. Multiply and fill in the blanks :




4. Write down times table of 5 :



5 Times Table Chart

5 x 0	=	0
5 x 1	=	5
5 x 2	=	10
5 x 3	=	15
5 x 4	=	20
5 x 5	=	25
5 x 6	=	30
5 x 7	=	35
5 x 8	=	40
5 x 9	=	45
5 x 10	=	50

Times Tables



5. Write down times table of 7 :



7 Times Table Chart

7 x 0	=	0
7 x 1	=	7
7 x 2	=	14
7 x 3	=	21
7 x 4	=	28
7 x 5	=	35
7 x 6	=	42
7 x 7	=	49
7 x 8	=	56
7 x 9	=	63
7 x 10	=	70

**TIMES
TABLES**



🌀 Prepared by : Ibnat Zuva

🌀 Teacher's mail address: zuva.ibnat@yahoo.com