



2<sup>nd</sup> Term

Subject: Mathematics

Revision Work (Day:1)


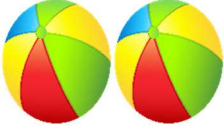






1. Write down the correct spelling of the following numbers:

Numbers	Words
52	
57	
64	
68	
70	

2. নিচের সংখ্যা গুলোর সঠিক বানান লিখ:

৫৩	
৫৬	
৬৫	
৬৯	
৭০	

3. Count the picture then write the numbers. After that do the following subtraction with the help of the pictures and write down the answers in the given blank boxes.

		
<input type="text"/>	-	<input type="text"/>
		= <input type="text"/>
		
<input type="text"/>	-	<input type="text"/>
		= <input type="text"/>
		
<input type="text"/>	-	<input type="text"/>
		= <input type="text"/>
		
<input type="text"/>	-	<input type="text"/>
		= <input type="text"/>

4. Do the following subtractions ( 2 digits) and write down the correct answers in the given blank boxes:

$$\begin{array}{r} \text{a) } 56 \\ - 13 \\ \hline \square \end{array}$$

$$\begin{array}{r} \text{b) } 87 \\ - 40 \\ \hline \square \end{array}$$

$$\begin{array}{r} \text{c) } 35 \\ - 23 \\ \hline \square \end{array}$$

$$\begin{array}{r} \text{d) } 38 \\ - 12 \\ \hline \square \end{array}$$

$$\begin{array}{r} \text{e) } 95 \\ - 32 \\ \hline \square \end{array}$$

5. Do the following subtractions ( 2 digits) with borrowing and write down the correct answers in the given blank boxes:

$$\begin{array}{r} \text{a) } 22 \\ - 3 \\ \hline \square \end{array}$$



$$\begin{array}{r} \text{b) } 52 \\ - 37 \\ \hline \square \end{array}$$

$$\begin{array}{r} \text{c) } 90 \\ - 42 \\ \hline \square \end{array}$$


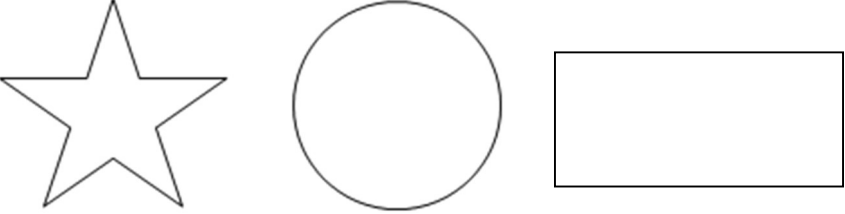
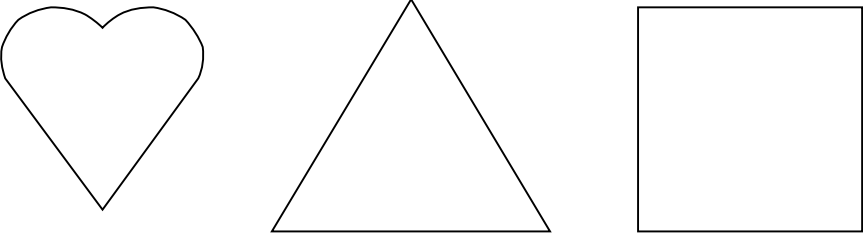
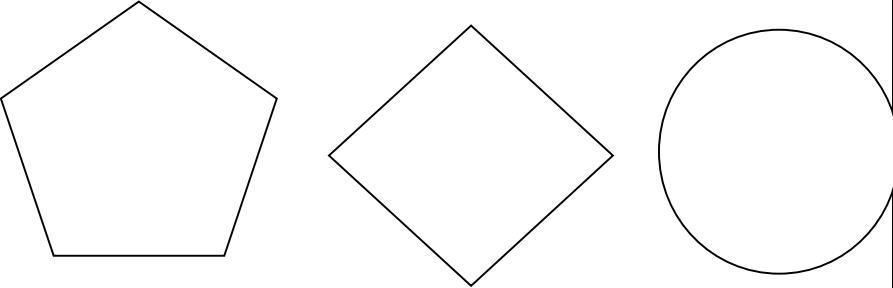


6. Find the currencies and write it down beside the countries name:





Ringgit , Dollar , Baht , Euro , Pound , Yen, Rupee , Taka , Riyal, Dinar.

Countries		Currencies
India		
U.S.A.		
Japan		
France		
Bangladesh		
Saudi Arab		
Thailand		
Malaysia		
Iraq		
U.K.		

7. Identify and colour the correct shapes.

<p><b>Square</b></p>	
<p><b>Rectangle</b></p>	
<p><b>Triangle</b></p>	
<p><b>Circle</b></p>	

8. Draw a straight line to match the correct shapes with the alike pictures.

	<p><b>Circle</b></p>
	<p><b>Triangle</b></p>
	<p><b>Rectangle</b></p>
	<p><b>Square</b></p>

Prepared by : Ibnat Zuva

Teacher's mail address: [zuva.ibnat@yahoo.com](mailto:zuva.ibnat@yahoo.com)