

Class: 3

Subject: Mathematics

Prepared by Shameema Akhtar

Date: 13/5/2020



Chapter: Multiplication

At the end of the chapter, we will be able to.

- Multiplication related word problems.

Lecture -5 notes

Word problems (60 page)

3. 1 hali is equal to 4 items. How many items will be in 5 hali?

Line 1: 1 hali equals to 4 items

Line 2: how many items will be in 5

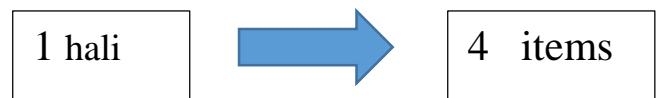
hali? 5 hali means 5 times 4

Solution:

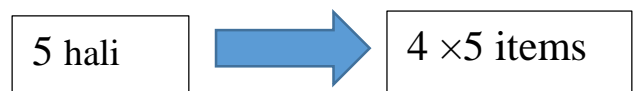
1 hali is equal to 4 items

∴ 5 hali is equal to 4×5

= 20 items



1 hali is equal to 4 items



5 hali is equal to 4×5

4. If there are 6 flowers in a bundle, then how many flowers will be in 8 bundles?



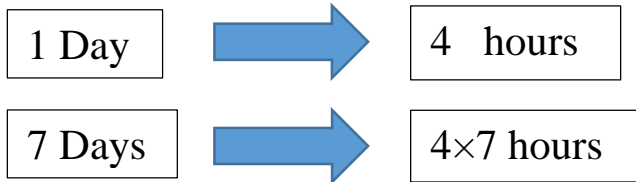
Class: 3

Subject: Mathematics

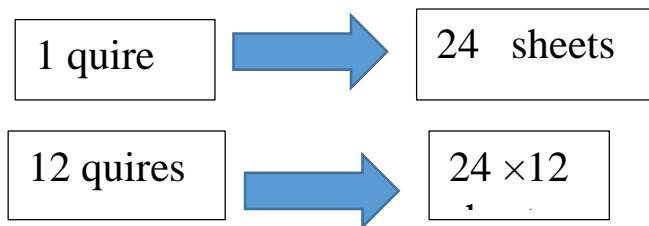
Prepared by Shameema Akhtar

Date: 13/5/2020

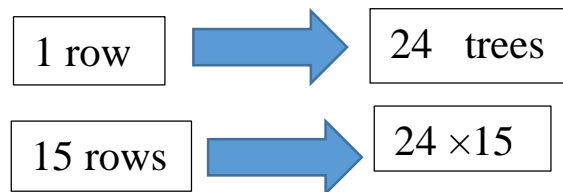
5. Toma reads books 4 hours daily. How many hours does she read in a week?



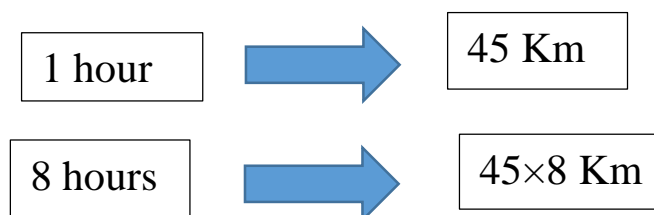
6. There are 24 sheets of paper in a quire. How many sheets will be in 12 quire?



7. there are 15 rows of betel-nuts trees in ranu's garden and there are 24 trees in each row. How many trees are there in the garden?



8. Tondra Chakma drives at the rate of 45 km per hour. How many kms will she go in 8 hours at the same speed?



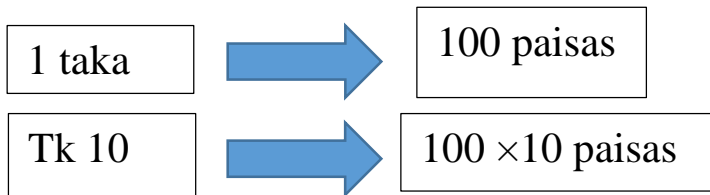
Class: 3

Subject: Mathematics

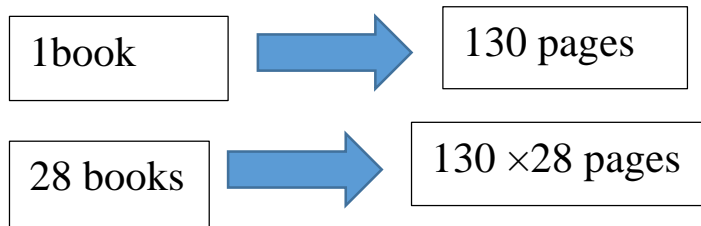
Prepared by Shameema Akhtar

Date: 13/5/2020

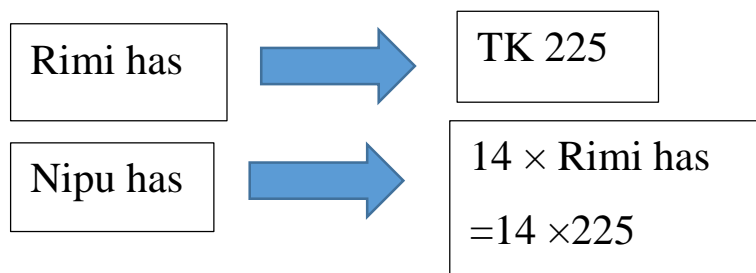
9. 1 taka is equal to 100 paisa. How many paisas will be in Tk. 10?



10. There are 130 pages in a book. How many pages are there in 28 such books?



11. Nipu has 14 times of what Rimi has. If Rimi has Tk. 225, then how many taka does Nipu have?



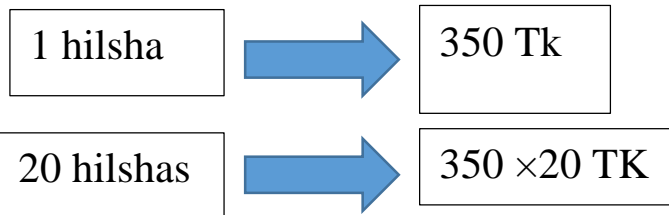
Class: 3

Subject: Mathematics

Prepared by Shameema Akhtar

Date: 13/5/2020

12. The piece of a hilsha fish is Tk.350. what is the price of 20 such hilsha fishes?



End