

Class Three Mathematics Lecture note

Shameema Akhtar
Asst. Mathematics Teacher
May 20, 2020



Chapter: Geometry

Lecture -1 notes

1. Draw and Define figures:

a. **A Point:** A small dot of a sharpen pencil is called a point.




Here, A is a point.

b. **A Line:** A set of points in a straight or curve path is called line.




Here, AB and CD are two lines.

c. **A Line segment:** A part of a line is called line segment.



Here, AB is a line segment.

d. **A Ray:** A set of points along a straight line is called a Ray.

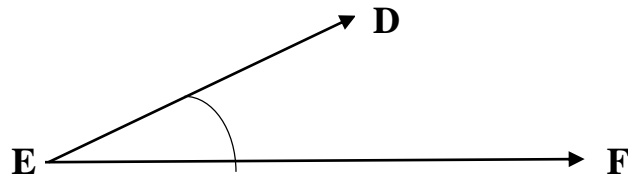


Here, AB is a ray.

Class Three Mathematics Lecture note

Shameema Akhtar
Asst. Mathematics Teacher
May 20, 2020

e. An Angle: When two rays meet at a point is called angle.



Here, \angle DEF is an angle

=====