

Name:
Class:One
Section: Pink
Date: 10/10/2020
Subject: Mathematics
**Topic:71-100
& time**
Marks: 20
1. Write down the following numbers in words:
1x5=5

 73 =

 88 =


 94 =

 100 =

 99 =

২. নিচের সংখ্যাগুলো কথায় লিখ:
1x5=5

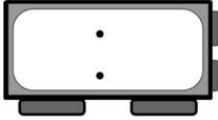
৮৫	=	
		
৭৮	=	
		

୧୨	=
	
୧୫	=
	
୧୬	=

3. Write the time under each of the clock ;

.50x12=6

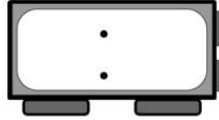
1)



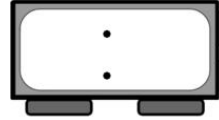
2)



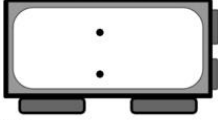
3)



4)



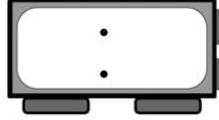
5)



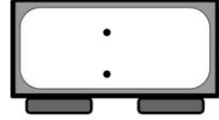
6)



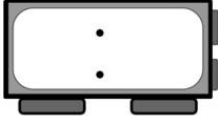
7)



8)



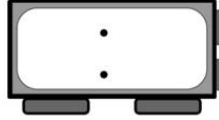
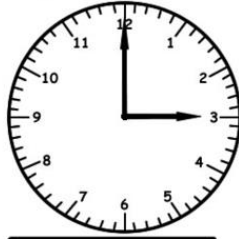
9)



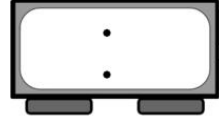
10)



11)




12)



4. Draw the hour hand & minute hand on the clock according to the given time: 1x4=4




9:55



1:05



6:20



12:00

Test