



Cosmo School

Class One

Topic – Time

Day - Thursday


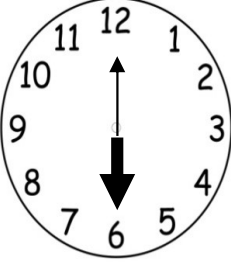

Subject: Math

Revision Answersheet




Day - 22/10/2020

1. Read the following clocks and write the time inside the blank boxes which are given under the clocks :

1)		2)		3)	
	2:30		4:30		3:30
4)		5)		6)	
	9:30		12:20		5:45

7)		8)		9)	
	7:05		6:00		8:00

2. Let's think about the time and match it with the clocks.

1)	4 : 30	
2)	6 : 00	
3)	12 : 00	

3. Fill in the blanks with the appropriate answer.

a) 1 year = days.

b) 1 day = hours.

c) 1 hour = minutes.

d) There are = months in a year.

e) There are = weeks in a year.



4. Write down the seven days name in a week in the following table.

Seven days' name
1. Sunday
2. Monday
3. Tuesday
4. Wednesday
5. Thursday
6. Friday
7. Saturday



Prepared by : **ibnat Zuva**

Teacher's mail address: **zuva.ibnat@yahoo.com**