



Cosmo School

Class One

Topic – Time

Day - Thursday


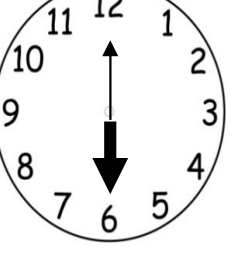

Subject: Math

Revision Worksheet

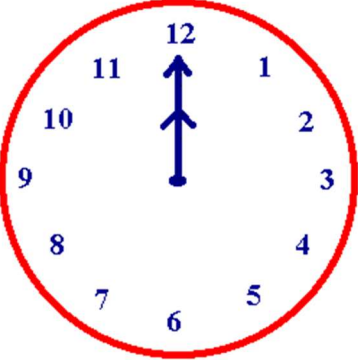


Day - 22/10/2020

1. Read the following clocks and write the time inside the blank boxes which are given under the clocks :

1)		2)		3)	
	<input type="text"/>		<input type="text"/>		<input type="text"/>
4)		5)		6)	
	<input type="text"/>		<input type="text"/>		<input type="text"/>

7)		8)		9)	
	<input data-bbox="304 495 544 566" type="text"/>		<input data-bbox="703 495 943 566" type="text"/>		<input data-bbox="1118 495 1358 566" type="text"/>

2. Let's think about the time and match it with the clocks.

1)	4 : 30	
2)	6 : 00	
3)	12 : 00	

4. Write down the seven days name in a week in the following table.

Seven days' name
1.
2.
3.
4.
5.
6.
7.



Prepared by : **ibnat Zuva**

Teacher's mail address: **zuva.ibnat@yahoo.com**