

Class: 2

Subject: Mathematics

Prepared by Shameema Akhtar

Date: 15/10/2020



Chapter: Measurement

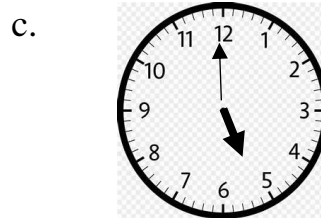
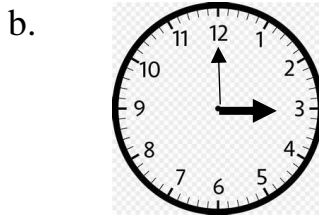
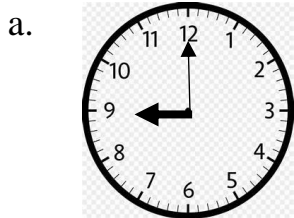
Revision sheet -2

***** Solve the Lecture sheet no 1 and 2 again.

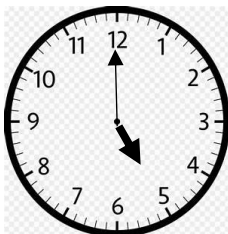
1. Show the following time by drawing analog clock.

- a) 12 o clock.
- b) 6 o clock.
- c) 11 o clock.
- d) 2 o clock
- e) 5 o clock..
- f) 7o clock.

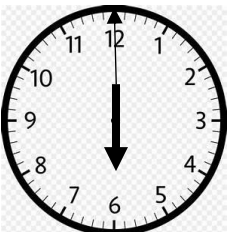
2. Write down the following time, which is shown in the given analog clocks:



3. Fill in the gaps with the write time indicated by the clock in the pictures:



a. I awake up at _____



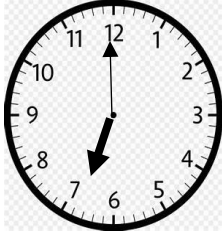
b. I do exercice at _____

Class: 2

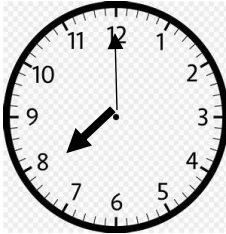
Subject: Mathematics

Prepared by Shameema Akhtar

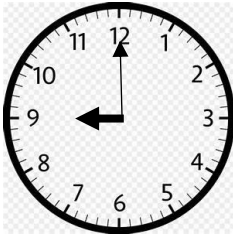
Date: 15/10/2020



c. I take bath at _____



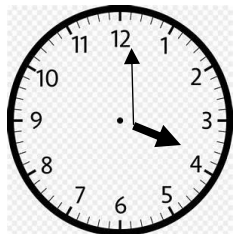
d. I take breakfast at _____



e. I start my study at _____



f.. I take lunch at _____




g. My play time starts at _____

Class: 2


Subject: Mathematics

Prepared by Shameema Akhtar

Date: 15/10/2020



h.I take dinner at _____



i.Igo to bed at _____

***** Assessment Date : 19/10/2020