

Class: 2

Subject: Mathematics

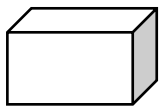
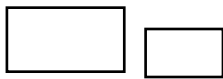
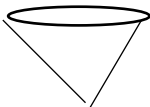


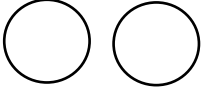
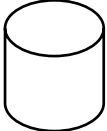

Prepared by Shameema Akhtar

Date: 21/ 09/ 2020



Chapter: Geometry

Solution of Lecture -2 notes

Name	Shape	Viewed from above and the side	Real-life Examples
Cuboid			Book, brick, dice
Cone			Fennel, ice-cream, polo
Sphere			Marble, football, watermelon
Cylinder			Glass, botol, mug

Assess your learning

1. Draw the following figures:

a. A Cuboid b. A Cone c. A Sphere d. A Cylinder

2. NCTB book page 91.

3. NCTB book page 92

Class: 2

Subject: Mathematics

Prepared by Shameema Akhtar

Date: 21/ 09/ 2020

NCTB book page 91.



Reza and Meena collected the following items in their house. Discuss what kinds of shapes are they?



Watermelon, football, and marble must be in the same group.

Dice, brick, and book have a similar shape, don't they?



Let's write their names in the blanks in the following table.

Name	Shape	Example
Cuboid		Brick, _____, _____
Cylinder		Glass, _____, _____
Cone		Ice cream, _____, _____
Sphere		Watermelon, _____, _____

Class: 2

Subject: Mathematics










Prepared by Shameema Akhtar

Date: 21/ 09/ 2020

NCTB book page 92



Match a name, a figure and its shape viewed from the above and the side.

Name	Figure	Above	Side
Cuboid			
Cone			
Sphere			
Cylinder	