

**Class: 2**

**Subject: Mathematics**

**Prepared by Shameema Akhtar**

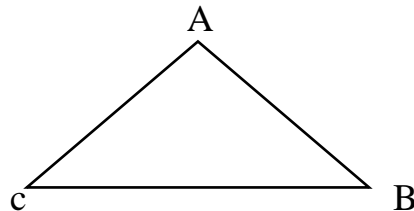
**Date: 17/ 09/ 2020**



Solution of Lecture -1 notes


Answer to the question no -1

**a. Triangle:**



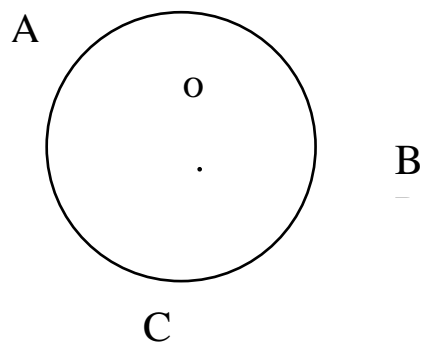
Here, ABC is a Triangle.

**b. Quadrangle:**



Here, ABCD is a quadrangle

**c. Circle:**



Here, ABCD is a circle.

Class: 2

Subject: Mathematics


Prepared by Shameema Akhtar

Date: 17/ 09/ 2020

Answer to the question no -2

a. Three b. four c. Triangle d. quadrangle e. circle

3. NCTB book page 88.



Question answers:

- Triangles and quadrangles
- 3
- 4

Divide the foods into two groups of shapes that look alike.

The foods enclosed by 3 straight lines	Singara, sandwich, grapes,
The foods enclosed by 4 straight lines	Tiffin box, biscuit packet, Bread,

4. NCTB book page 89.

Do yourselves

5. NCTB book page 90.

Triangles: figure-A and F

Quadrangles: figure- D and E