

**Class Two Final Term Mathematics Chapter Assessment -1****Date: 24/ 09/ 2020****Chapters: Geometry****Time: 30 minutes**

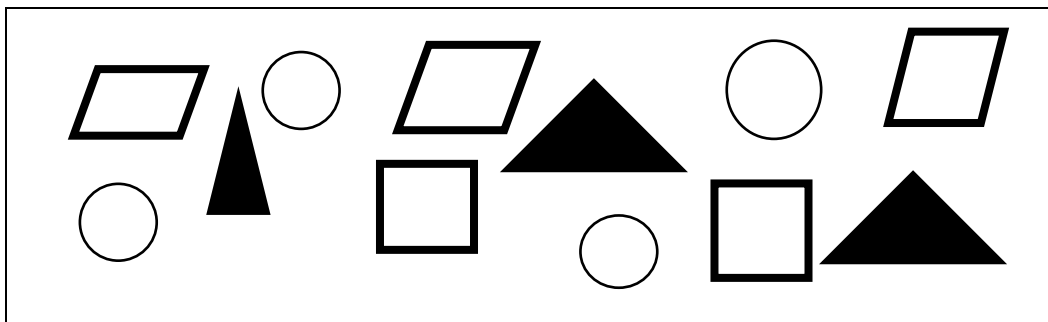
[NB: The figures in the right side indicate full marks]

**Full marks: 20****1. Fill in the boxes with appropriate numbers or words:  $1 \times 4 = 4$** 

- A shape that is enclosed by \_\_\_\_\_ sides is called a quadrangle.
- Your class room board looks like \_\_\_\_\_
- A bangle looks like \_\_\_\_\_







- A Sandwich looks like \_\_\_\_\_.

**2. With the help of the picture write down the correct answers of the following questions :  $1 \times 3 = 3$** 

- How many triangles are in the picture?
- How many quadrangles are in the picture?
- How many circles are in the picture?

**3. Match the columns with the correct answer:**


**1 × 4 = 4**

Column A	Column B
a. Example of cuboid	 1. ball.
b. Example of cylinder	 2. Polo
c. Examples of cone	3. jug. 
d. Examples of sphere	4. box. 

**4. Complete the sentence with the correct answer**

**1 × 7 = 7**

- a. A nail is cuboid /cone/cylinder/sphere
- b. A tube light is cuboid /cone/cylinder/sphere.
- c. An orange is cuboid /cone/cylinder/sphere.
- d. A dice is cuboid /cone/cylinder/sphere.
- e. A book is cuboid cone/cylinder/sphere.
- f. A match box is cuboid /cone/cylinder/sphere.
- g. The earth is cuboid /cone/cylinder/sphere.



**5. Draw a cone.**

**2**

.....