

Class: 3

Subject: Mathematics

Prepared by Shameema Akhtar

Date: 8/10/2020



Chapter: Measurement

Solution Sheet


1. Do yourselves

2.:a. 9 o'clock

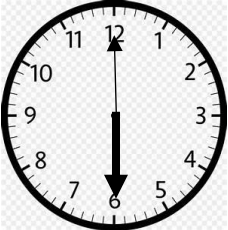
b. 3 o'clock

c. 5 o'clock

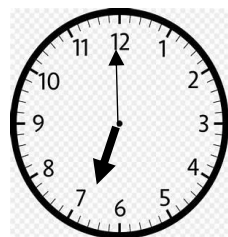
3. Fill in the gaps with the write time indicate by the clock in the pictures:



a. I awake up at 5 hours 9 minutes



b. I take exercice at 6 o'clock



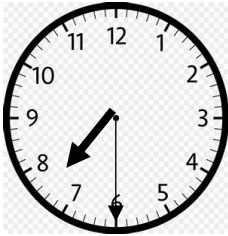
c. I take bath at 6 o'clock

Class: 3

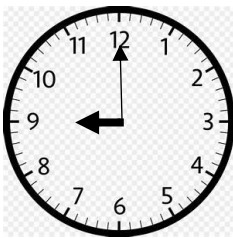
Subject: Mathematics

Prepared by Shameema Akhtar

Date: 8/10/2020




d. I eat breakfast at 7 hours 30 minutes



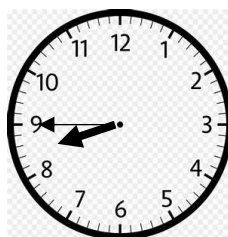
e. I start study at 9 o' clock



f.. I take lunch at 1 o' clock



g. My play time starts from lunch at 4 o' clock




h.I take dinner at 8 hours 45 minutes

Class: 3

Subject: Mathematics

Prepared by Shameema Akhtar

Date: 8/10/2020



i. I go to bed at 11 o'clock.

3. Do yourselfs

4. Do yourselfs

5. 5 o'clock, 6 hours 30 minutes, 8 hours 45 minutes, 7 hours 15 minutes
10 hours 50 minutes, 8 hours 25 minutes.