


Class Three Final Term Mathematics Chapter Assessment -1**Date: 24/ 09/ 2020****Chapters: Geometry****Time : 30 minutes**

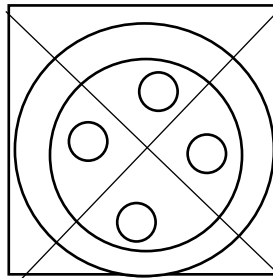
[NB: The figures in the right side indicate full marks]

Full marks: 20**1. Fill in the boxes with appropriate numbers or words: $1 \times 4 = 4$**

- A shape that is enclosed by _____ sides is called a quadrilateral.
- Your class room board looks like _____
- The all _____ of a square are equal.
- All the corner of a rectangle is _____

2. Draw the shapes which are given bellow, then colour the shapes with 4 sides red . colour the shapes with no sides Yellow. $2 \times 5 = 10$ **3. Write down only correct answer: $1 \times 6 = 6$**

- How many circles are there in the figure?



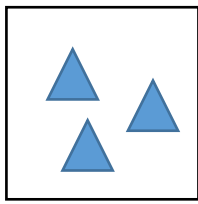
a.3

b.4

c.5

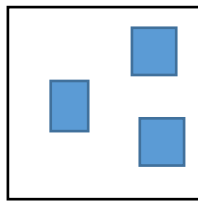
d.6

2. Tina has 4 groups of shapes. In which group she will put a bangle



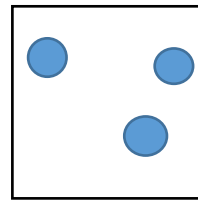
E

a.E



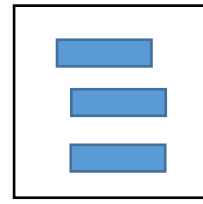
F

b.F



G

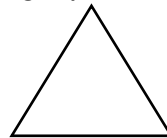
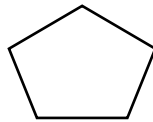

c.G



H

d.H

3. Name the shape which is shaded bellow?



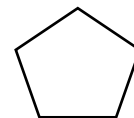
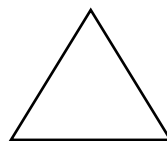
a. Quadrilateral

b. circle

c. Triangle

d. pentagon

4. Which shape is not shown here?



a. Quadrilateral

b. circle

c. Triangle

d. star

5. Which shape has four sides?


a. Quadrilateral

b. circle

c. Triangle

d. star

6. Look at the two Shapes .Which of the following is not true?



a. They are both quadrilaterals.

b. They are same size

c. They have same numbers sides

d. They have the same number of vertexes.
