

**Exercise**

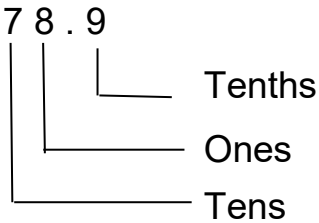
1) Find the place value: 78.9, 16.25, 873.215

2) Classify these numbers in decimals and integers.

269, 1.369, 789.0005, 23, 95.45, 6, 3.2, 39, 56, 2, 99.3

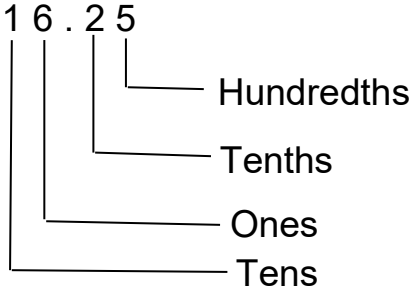
Solution:

1)  $78.9$

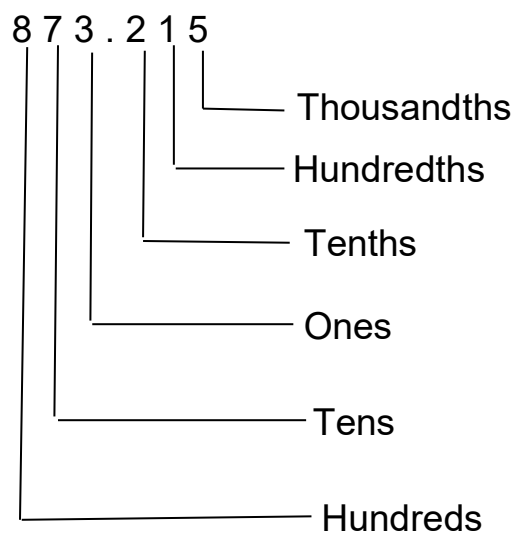


Tenths  
Ones  
Tens

$16.25$



Hundredths  
Tenths  
Ones  
Tens



2) Decimals: 1.369, 789.0005, 95.45, 3.2, 99.3

Integers: 269, 23, 6, 39, 56, 2