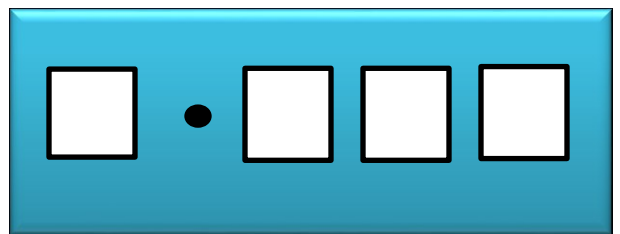


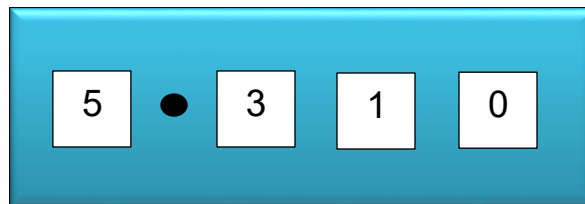
1. You have following four cards and make decimals using the format on the right.



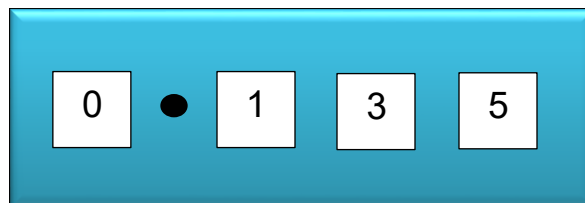
- What is the largest number you can make?
- What is the smallest number you can make?

**Solution:**

a) The largest number



b) The smallest number



2. Hasan's bag weighs 4.8 kg and Ripa's bag weighs 3.59 kg.

- a. What is the total weight of their bags?
- b. What is the difference in weight in kg?

**Solution:**

a) Hasan's bag weighs = 4.80 Kg

Ripa's bag weighs = 3.59 Kg

---

∴ Total weight = 8.39 Kg

Ans: 8.39 Kg.

b) Hasan's bag weighs = 4.80 Kg

Ripa's bag weighs = 3.59 Kg

---

∴ Difference = 1.21 Kg

Ans: 1.21 Kg.

Lecture sheet prepared by –

Sadia Khanam